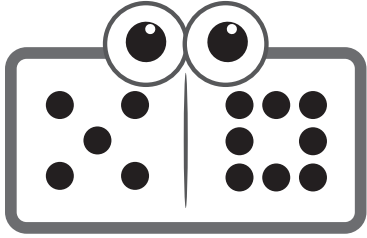



# Domino Balance

Directions: Balance the equations by drawing in the correct number of pips on the dominoes on the right. Write the equations underneath.




=




\_\_\_\_\_ + \_\_\_\_\_

=

\_\_\_\_\_ + \_\_\_\_\_




=




\_\_\_\_\_ + \_\_\_\_\_

=

\_\_\_\_\_ + \_\_\_\_\_




=




\_\_\_\_\_ + \_\_\_\_\_

=

\_\_\_\_\_ + \_\_\_\_\_



=



\_\_\_\_\_ + \_\_\_\_\_

=

\_\_\_\_\_ + \_\_\_\_\_